

TEACHERS FORUM®



Vacation Activity Book

Class 1

A bridge to class 2

Dear children,

The long awaited summer vacation is here. Summer is a time to relax, to be productive and to get ahead. As important as it is to rest and enjoy, it is also important to continue to learn. Strike a balance between work and play and allow yourself to grow in the process. You can spend your time as you wish but make sure that along with enjoying and relaxing make this summer a time to learn new things exploring the opportunities available.

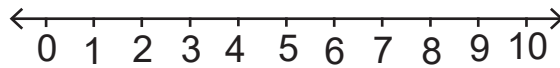
To enhance your learning we have planned enjoyable activities to keep your skills sharp and concepts clear. It will surely enhance your learning process.

Relax, enjoy and have lots of fun.

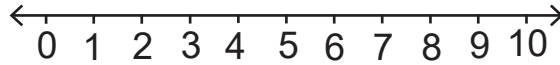
Prepared by a group of Experienced Teachers

Add the numbers on the numberline :

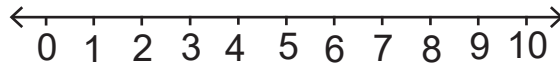
$1 + 2 + 3 = \square$



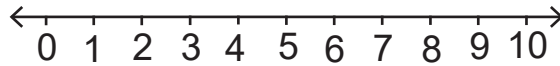
$2 + 0 + 2 = \square$



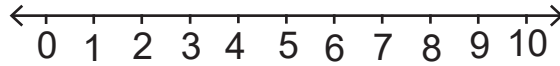
$3 + 3 + 2 = \square$



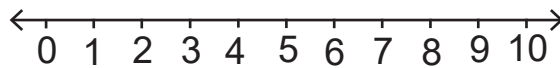
$4 + 1 + 3 = \square$



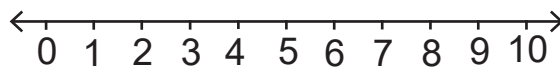
$5 + 1 + 4 = \square$

**Subtract the numbers on the numberline :**

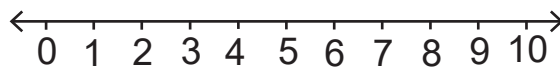
$9 - 4 - 1 = \square$



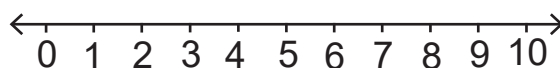
$7 - 2 - 0 = \square$



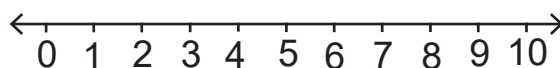
$9 - 6 - 3 = \square$



$4 - 2 - 1 = \square$



$7 - 4 - 1 = \square$



Write the missing numbers:

- i. 18, 17, _____, _____, _____, _____.
- ii. 82, 81, _____, _____, _____, _____.
- iii. 56, 55, _____, _____, _____, _____.
- iv. 29, 28, _____, _____, _____, _____.
- v. 66, 65, _____, _____, _____, _____.
- vi. 33, 32, _____, _____, _____, _____.
- vii. 92, 91, _____, _____, _____, _____.
- viii. 12, 11, _____, _____, _____, _____.

Ring the Biggest number:

- | | | | | |
|-----|----|----|----|----|
| (a) | 27 | 22 | 18 | 17 |
| (b) | 45 | 47 | 49 | 42 |
| (c) | 33 | 89 | 88 | 68 |
| (d) | 91 | 99 | 98 | 94 |
| (e) | 10 | 40 | 60 | 80 |
| (f) | 42 | 64 | 61 | 52 |
| (g) | 77 | 62 | 18 | 17 |
| (h) | 55 | 57 | 49 | 50 |
| (i) | 85 | 87 | 88 | 79 |

Write 'he, she or it' for the given words :

- | | |
|------------------|----------------------|
| 1. Pooja _____ | 2. grandmother _____ |
| 3. River _____ | 4. aunt _____ |
| 5. brother _____ | 6. moon _____ |
| 7. book _____ | 8. man _____ |
| 9. uncle _____ | 10. father _____ |

Write the name of the person who :

- | | |
|-----------------------------|-------------|
| 1. mends shoes. | C _ _ _ _ _ |
| 2. looks after a garden. | G _ _ _ _ _ |
| 3. flies an aeroplane | P _ _ _ _ |
| 4. looks after sick people. | N _ _ _ _ |
| 5. stitches clothes | T _ _ _ _ |

Write a question for the following sentences using 'Are you' or 'Is it'

- | | |
|--|-------|
| 1. You are a good student. | _____ |
| 2. He is singing well. | _____ |
| 3. You are playing cricket. | _____ |
| 4. It is raining outside. | _____ |
| 5. It is a good car. | _____ |
| 6. You are going to the park tomorrow. | _____ |

Fill in the boxes :

$60 - 10 = \square$

$12 - 5 = \square$

$20 - 20 = \square$

$9 - 0 = \square$

$70 - 20 = \square$

$6 - 6 = \square$

$40 - 10 = \square$

$11 - 5 = \square$

$50 - 30 = \square$

$19 - 6 = \square$

$90 - 50 = \square$

$18 - 4 = \square$

Subtract :

$$\begin{array}{r} 46 \\ -25 \\ \hline \hline \end{array}$$

$$\begin{array}{r} 99 \\ -6 \\ \hline \hline \end{array}$$

$$\begin{array}{r} 15 \\ -3 \\ \hline \hline \end{array}$$

$$\begin{array}{r} 35 \\ -15 \\ \hline \hline \end{array}$$

$$\begin{array}{r} 93 \\ -60 \\ \hline \hline \end{array}$$

$$\begin{array}{r} 17 \\ -5 \\ \hline \hline \end{array}$$

$$\begin{array}{r} 88 \\ -38 \\ \hline \hline \end{array}$$

$$\begin{array}{r} 77 \\ -7 \\ \hline \hline \end{array}$$

$$\begin{array}{r} 58 \\ -6 \\ \hline \hline \end{array}$$

$$\begin{array}{r} 12 \\ -1 \\ \hline \hline \end{array}$$

$$\begin{array}{r} 38 \\ -12 \\ \hline \hline \end{array}$$

$$\begin{array}{r} 48 \\ -20 \\ \hline \hline \end{array}$$

$$\begin{array}{r} 48 \\ -10 \\ \hline \hline \end{array}$$

$$\begin{array}{r} 26 \\ -22 \\ \hline \hline \end{array}$$

$$\begin{array}{r} 58 \\ -16 \\ \hline \hline \end{array}$$

$$\begin{array}{r} 99 \\ -66 \\ \hline \hline \end{array}$$

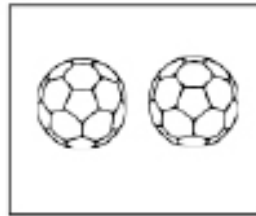
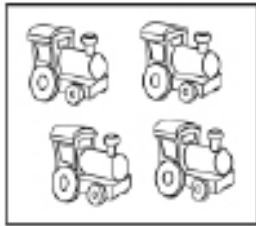
$$\begin{array}{r} 61 \\ -31 \\ \hline \hline \end{array}$$

$$\begin{array}{r} 29 \\ -18 \\ \hline \hline \end{array}$$

$$\begin{array}{r} 71 \\ -40 \\ \hline \hline \end{array}$$


$$\begin{array}{r} 55 \\ -24 \\ \hline \hline \end{array}$$

More and Less :





There are more _____ than _____.

There are less _____ than _____.



There are more _____ than _____.

There are less _____ than _____.



There are more _____ than _____.

There are less _____ than _____.